


DOEL 3

- Je oefent breuken schattend te plaatsen en af te lezen op de getallenlijn.

HULP



De lijn loopt van 2 naar 3.

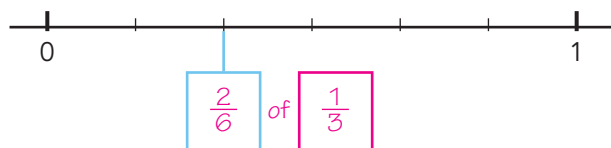
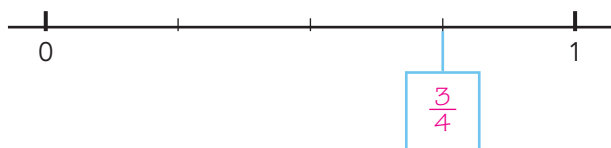
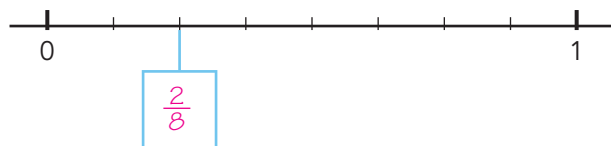
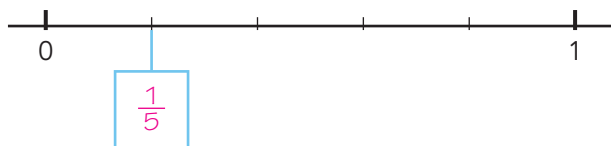
De lijn is verdeeld in 3 gelijke stukken.

Elk stuk is $\frac{1}{3}$ deel.

De pijl staat na de 2 en bij het tweede stuk: $2\frac{2}{3}$.

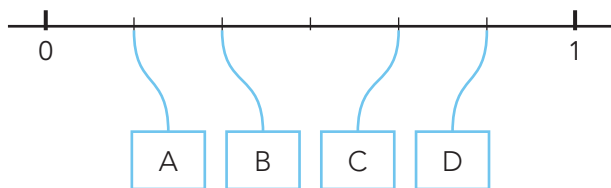
1

Welke breuk?

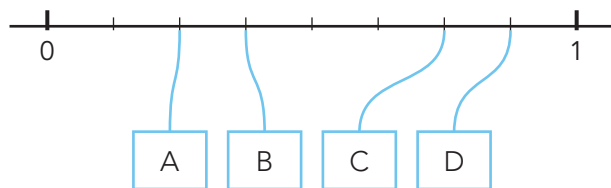


2

Waar op de getallenlijn? Schrijf de letter op.



Waar hoort $\frac{1}{3}$? **B**

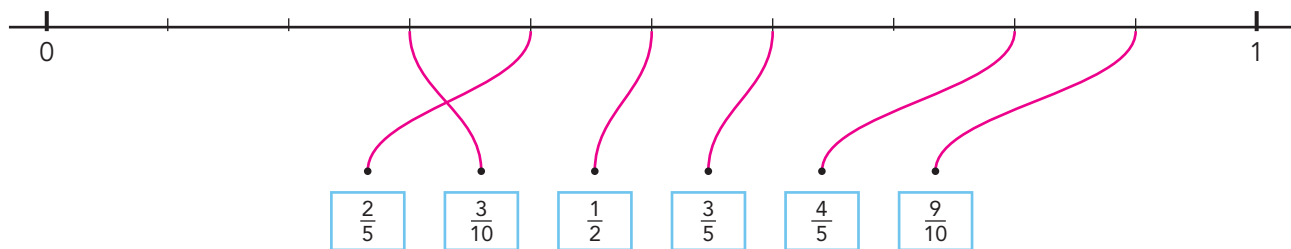
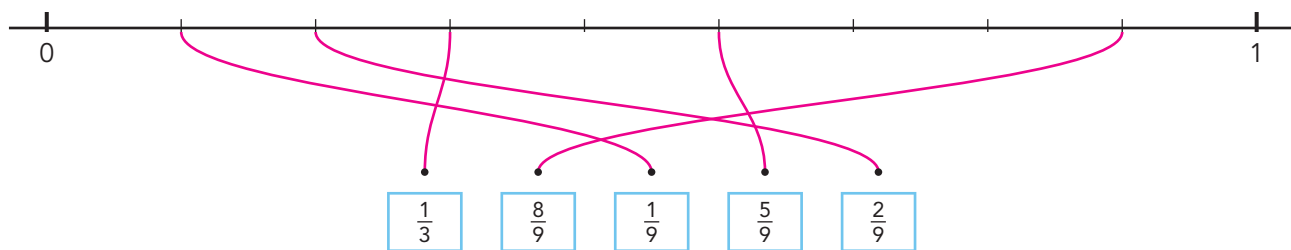
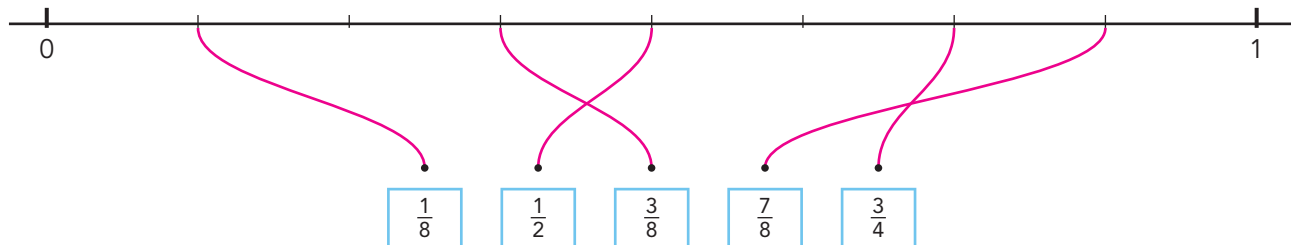


Waar hoort $\frac{3}{4}$? **C**

GA VERDER →

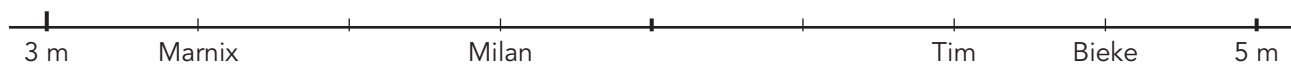
3

Maak vast.

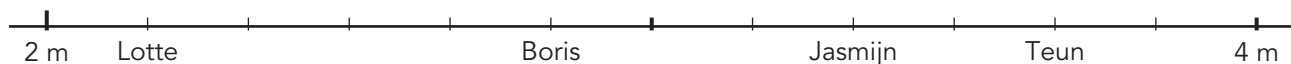


4

Hoe ver is er gegooid?



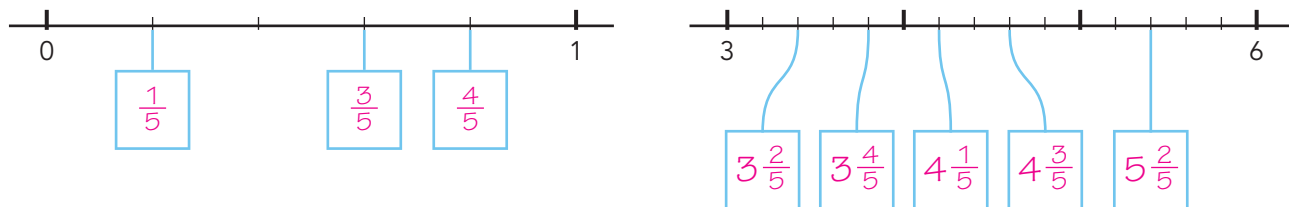
Marnix: $3\frac{1}{4}$ meter
 Milan: $3\frac{3}{4}$ meter
 Tim: $4\frac{1}{2}$ meter
 Bieke: $4\frac{3}{4}$ meter



Lotte: $2\frac{1}{6}$ meter
 Boris: $2\frac{5}{6}$ meter
 Jasmijn: $3\frac{2}{6}$ of $3\frac{1}{3}$ meter
 Teun: $3\frac{4}{6}$ of $3\frac{2}{3}$ meter

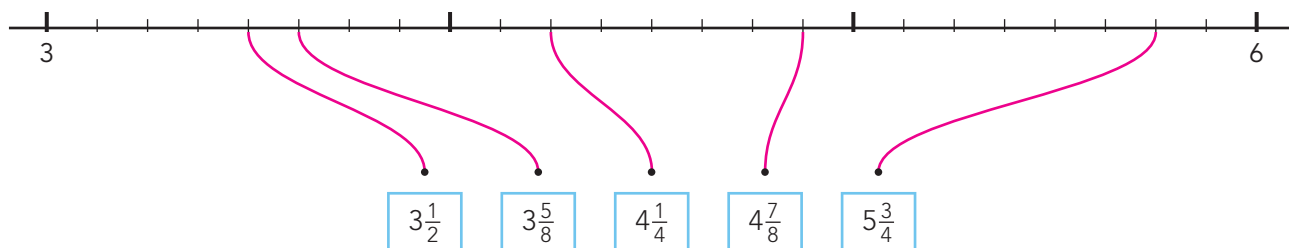
5a

Welke breuk? Vul in.



5b

Maak vast.



KLAAR!