


DOEL 3

- Je oefent breuken schattend te plaatsen en af te lezen op de getallenlijn.

HULP



De lijn loopt van 2 naar 3.

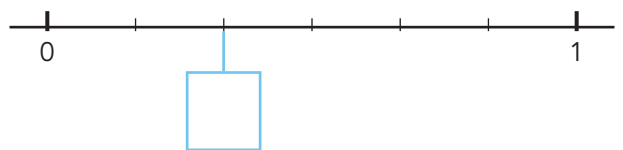
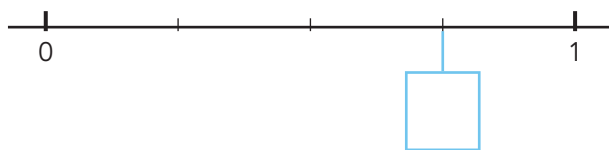
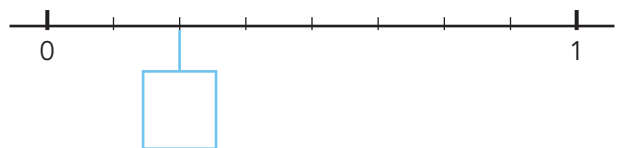
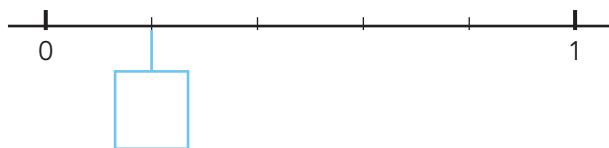
De lijn is verdeeld in 3 gelijke stukken.

Elk stuk is $\frac{1}{3}$ deel.

De pijl staat na de 2 en bij het tweede stuk: $2\frac{2}{3}$.

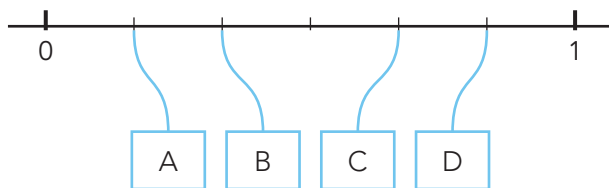
1

Welke breuk?

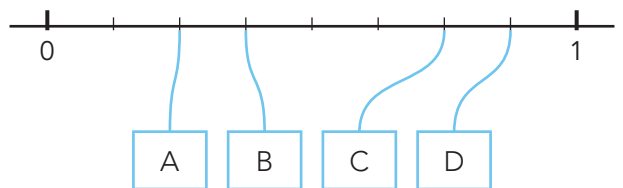


2

Waar op de getallenlijn? Schrijf de letter op.



Waar hoort $\frac{1}{3}$?

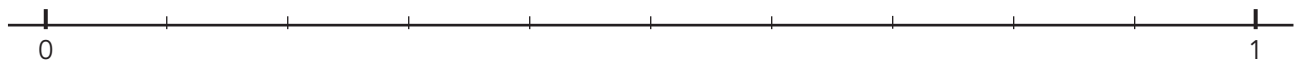
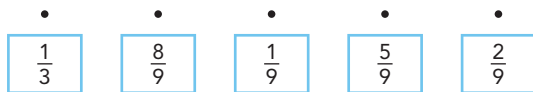

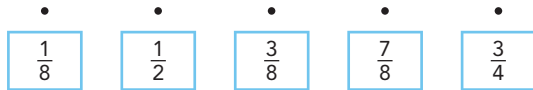
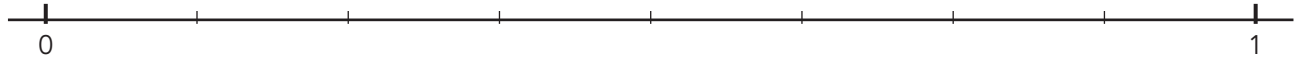


Waar hoort $\frac{3}{4}$?

GA VERDER →

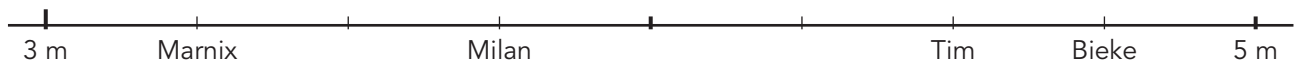
3

Maak vast.

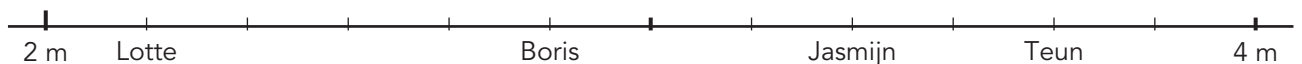


4

Hoe ver is er gegooid?



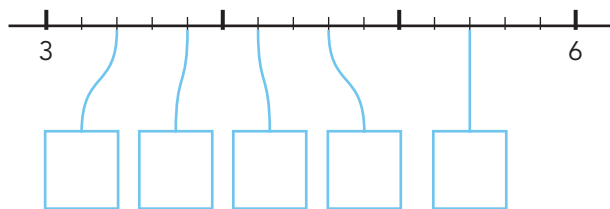
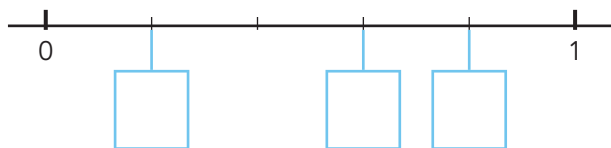
Marnix: meter Milan: meter Tim: meter Bieke: meter



Lotte: meter Boris: meter Jasmijn: meter Teun: meter

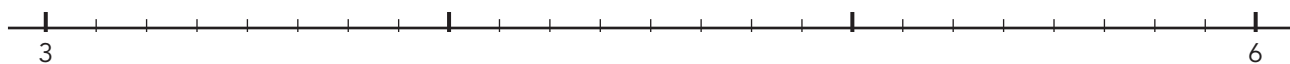
5a

Welke breuk? Vul in.



5b

Maak vast.



$$3\frac{1}{2}$$

$$3\frac{5}{8}$$

$$4\frac{1}{4}$$

$$4\frac{7}{8}$$

$$5\frac{3}{4}$$

KLAAR!