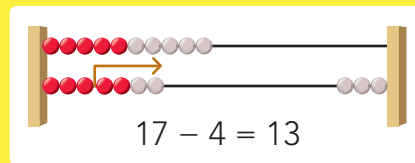
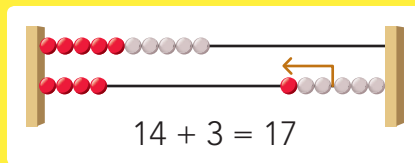
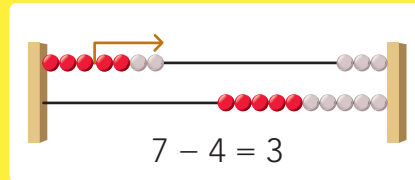
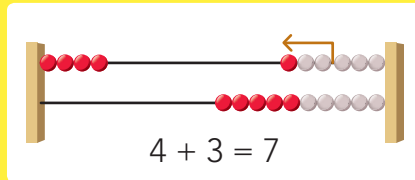


DOEL 3

- Je oefent plussommen en minsommen tot en met 20.
- Je denkt daarbij aan de sommen tot en met 10.
- Je weet het antwoord zonder te tellen.

HULP



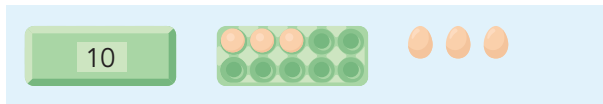
14 + 3 reken je uit met de kleine som: 4 + 3

17 - 4 reken je uit met de kleine som: 7 - 4

1

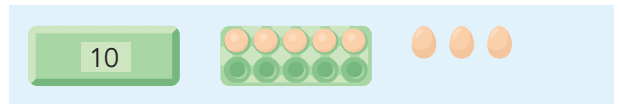
Wat is de grote som? Wat is de kleine som?

Reken uit.




..... + ..... = .....

..... + ..... = .....



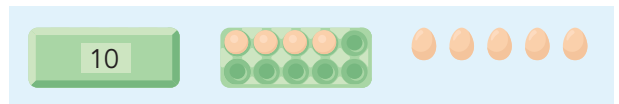
..... + ..... = .....

..... + ..... = .....



..... + ..... = .....

..... + ..... = .....



..... + ..... = .....

..... + ..... = .....

2

**Reken uit.**



Denk aan de kleine som.

$12 + 6 = \dots\dots$

$11 + 4 = \dots\dots$

$19 - 3 = \dots\dots$

$17 - 2 = \dots\dots$

$14 + 5 = \dots\dots$

$13 + 7 = \dots\dots$

$18 - 5 = \dots\dots$

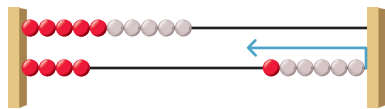
$20 - 10 = \dots\dots$

3

**Vul aan tot en met 20.**

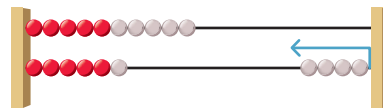


Schrijf de hulpsom in de denkwolk.



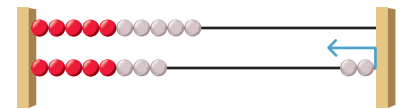
$4 + \dots\dots = 10$

$14 + \dots\dots = 20$



$6 + \dots\dots = 10$

$16 + \dots\dots = 20$



$8 + \dots\dots = 10$

$18 + \dots\dots = 20$

4

**Vul aan tot en met 20.**



Denk aan de vriendjes van 10.

$11 + \dots\dots = 20$

$13 + \dots\dots = 20$

$10 + \dots\dots = 20$

$19 + \dots\dots = 20$

$15 + \dots\dots = 20$

$16 + \dots\dots = 20$

$18 + \dots\dots = 20$

$14 + \dots\dots = 20$

5

**Maak de sommen.**



Schrijf de hulpsom in de denkwolk.

$12 + 4 = \dots\dots$   
 + ..... = .....

$17 - 5 = \dots\dots$   
 - ..... = .....

$18 + \dots\dots = 20$   
 8 + ..... = 10

$13 + 5 = \dots\dots$   
 + ..... = .....

$19 - 4 = \dots\dots$   
 - ..... = .....

$15 + \dots\dots = 20$   
 5 + ..... = 10

$11 + 7 = \dots\dots$   
 + ..... = .....

$16 - 4 = \dots\dots$   
 - ..... = .....

$11 + \dots\dots = 20$   
 1 + ..... = 10

**KLAAR!**