



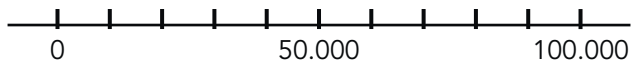
**doel**

- ▶ Je oefent tellen tot en met 100.000 met sprongen van 1, 10, 100, 1000 en 10.000.
- ▶ Je oefent getallen tot en met 100.000:
  - splitsen en samenstellen in tienduizendtallen, duizendtallen, honderdtallen, tientallen en eenheden;
  - op volgorde zetten;
  - schattend plaatsen en aflezen op de getallenlijn.

**hulp**

Tel 1 verder en 1 terug.

|          |          |          |          |          |  |  |  |  |  |
|----------|----------|----------|----------|----------|--|--|--|--|--|
| 6        | 9        | 9        | 9        | 8        |  |  |  |  |  |
| 6        | 9        | 9        | 9        | 9        |  |  |  |  |  |
| <b>7</b> | <b>0</b> | <b>0</b> | <b>0</b> | <b>0</b> |  |  |  |  |  |
| 7        | 0        | 0        | 0        | 1        |  |  |  |  |  |
| 7        | 0        | 0        | 0        | 2        |  |  |  |  |  |



**1**

**Splits de getallen. Vul het schema in en maak de som.**

|        |   | TD | D | H | T | E |                                |
|--------|---|----|---|---|---|---|--------------------------------|
| 98.830 | achtennegentigduizend<br>achthonderddertig            | 9  | 8 | 8 | 3 | 0 | $90.000 + 8000 + 800 + 30$     |
| 77.097 | zevenenzeventigduizend<br>zevenennegentig             | 7  | 7 | 0 | 9 | 7 | $70.000 + 7000 + 90 + 7$       |
| 80.999 | tachtigduizend negen-<br>honderd negennegentig        | 8  | 0 | 9 | 9 | 9 | $80.000 + 900 + 90 + 9$        |
| 72.499 | twee en zeventigduizend<br>vierhonderdnegenennegentig | 7  | 2 | 4 | 9 | 9 | $70.000 + 2000 + 400 + 90 + 9$ |
| 56.418 | zesenvijftigduizend<br>vierhonderdachttien            | 5  | 6 | 4 | 1 | 8 | $50.000 + 6000 + 400 + 10 + 8$ |
| 54.695 | vierenvijftigduizend<br>zeshonderdvijfennegentig      | 5  | 4 | 6 | 9 | 5 | $50.000 + 4000 + 600 + 90 + 5$ |

**ga verder** ➔



**2**

Hoeveel is het samen? Vul het schema in.

|                                | TD | D | H | T | E |
|--------------------------------|----|---|---|---|---|
| $40.000 + 600 + 50 + 4 + 6000$ | 4  | 6 | 6 | 5 | 4 |
| $2000 + 60 + 8 + 10.000 + 400$ | 1  | 2 | 4 | 6 | 8 |
| $800 + 6 + 70.000 + 3000$      | 7  | 3 | 8 | 0 | 6 |
| $60.000 + 80 + 5$              | 6  | 0 | 0 | 8 | 5 |
| $300 + 5000 + 1 + 40 + 30.000$ | 3  | 5 | 3 | 4 | 1 |

|                                | TD | D | H | T | E |
|--------------------------------|----|---|---|---|---|
| $100 + 6000 + 20.000 + 80 + 2$ | 2  | 6 | 1 | 8 | 2 |
| $30.000 + 400 + 3000 + 30 + 7$ | 3  | 3 | 4 | 3 | 7 |
| $1000 + 40 + 3 + 40.000$       | 4  | 1 | 0 | 4 | 3 |
| $7000 + 10 + 2 + 90.000 + 900$ | 9  | 7 | 9 | 1 | 2 |
| $8000 + 2 + 500 + 70 + 50.000$ | 5  | 8 | 5 | 7 | 2 |

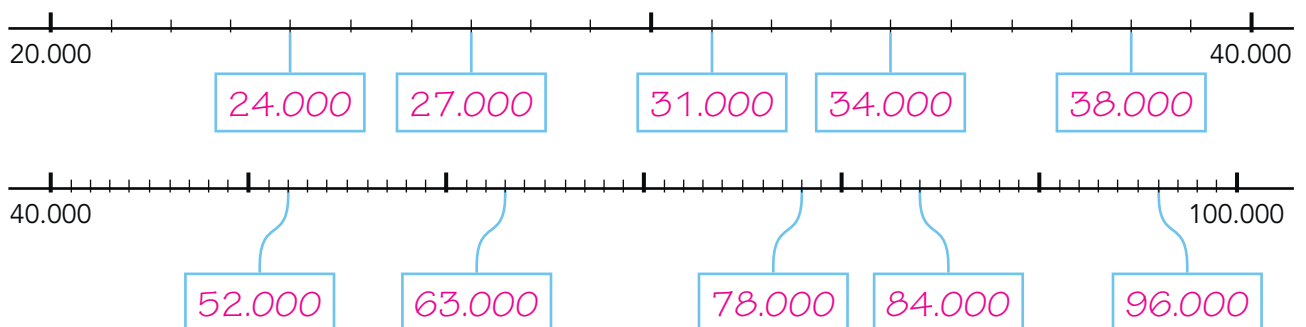
**3**

Van klein naar groot. Vul in.

|           |           |           |           |           |
|-----------|-----------|-----------|-----------|-----------|
| 37.390 km | 64.959 km | 14.479 km | 44.979 km | 17.409 km |
| 14.479 km | 17.409 km | 37.390 km | 44.979 km | 64.959 km |
| 18.310 km | 81.130 km | 11.013 km | 88.031 km | 81.830 km |
| 11.013 km | 18.310 km | 81.130 km | 81.830 km | 88.031 km |

**4**

Welk getal? Vul in.





**5** ▶ **Tel 3 sprongen verder of tel 3 sprongen terug.**

| + 1000 |   |   |   |   |
|--------|---|---|---|---|
| 4      | 5 | 8 | 9 | 7 |
| 4      | 6 | 8 | 9 | 7 |
| 4      | 7 | 8 | 9 | 7 |
| 4      | 8 | 8 | 9 | 7 |

| + 100 |   |   |   |   |
|-------|---|---|---|---|
| 8     | 9 | 9 | 2 | 0 |
| 9     | 0 | 0 | 2 | 0 |
| 9     | 0 | 1 | 2 | 0 |
| 9     | 0 | 2 | 2 | 0 |

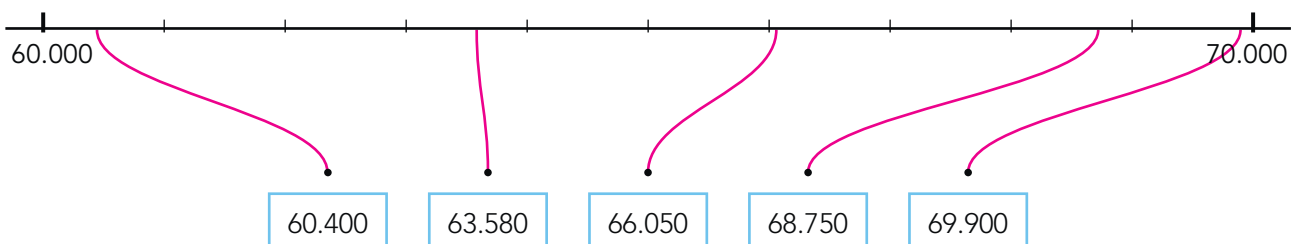
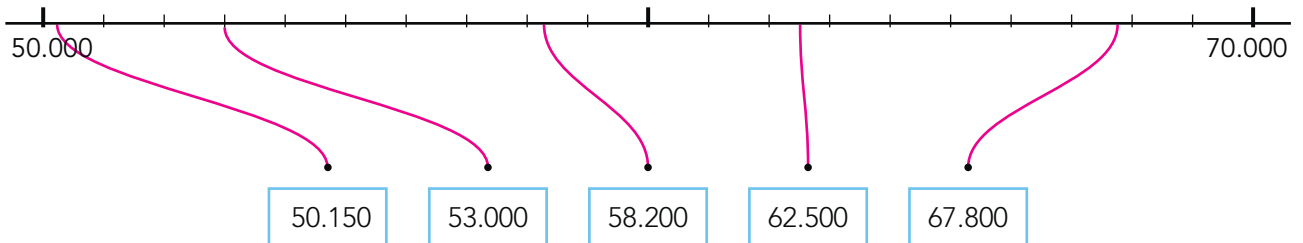
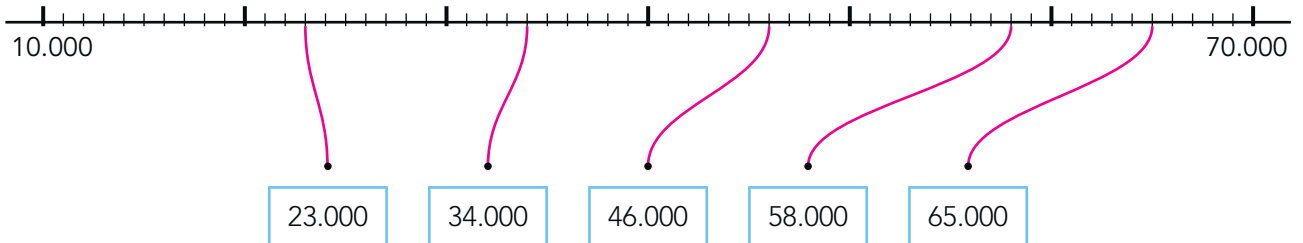
| + 10.000 |   |   |   |   |
|----------|---|---|---|---|
| 5        | 2 | 1 | 2 | 6 |
| 6        | 2 | 1 | 2 | 3 |
| 7        | 2 | 1 | 2 | 6 |
| 8        | 2 | 1 | 2 | 6 |

| - 1000 |   |   |   |   |
|--------|---|---|---|---|
| 3      | 1 | 8 | 7 | 0 |
| 3      | 0 | 8 | 7 | 0 |
| 2      | 9 | 8 | 7 | 0 |
| 2      | 8 | 8 | 7 | 0 |

| - 10 |   |   |   |   |
|------|---|---|---|---|
| 1    | 9 | 2 | 0 | 7 |
| 1    | 9 | 1 | 9 | 7 |
| 1    | 9 | 1 | 8 | 7 |
| 1    | 9 | 1 | 7 | 7 |

| - 1 |   |   |   |   |
|-----|---|---|---|---|
| 5   | 0 | 0 | 0 | 2 |
| 5   | 0 | 0 | 0 | 1 |
| 5   | 0 | 0 | 0 | 0 |
| 4   | 9 | 9 | 9 | 9 |

**6** ▶ **Waar liggen de getallen ongeveer? Maak vast.**



**klaar!**