



doel

► Je oefent bedragen tot en met 2 euro te herkennen en samen te stellen.

hulp

1 euro en 35 cent

1 EURO
50 Cent
20 Cent
20 Cent
10 Cent
5 Cent

Below each coin icon is a small square box, some of which are filled with blue color.

1

Maak het bedrag met zo min mogelijk munten.



45 cent

10 Cent, 10 Cent, 10 Cent, 10 Cent
20 Cent, 20 Cent
5 Cent, 5 Cent, 5 Cent, 5 Cent



75 cent

50 Cent
20 Cent, 20 Cent
5 Cent, 5 Cent



90 cent

50 Cent
20 Cent, 20 Cent, 20 Cent
10 Cent, 10 Cent, 10 Cent, 10 Cent




1 euro en 30 cent

1 EURO
20 Cent, 10 Cent, 10 Cent
20 Cent, 20 Cent, 20 Cent



1 euro en 60 cent

1 EURO
50 Cent, 50 Cent
5 Cent
20 Cent, 20 Cent



1 euro en 25 cent

1 EURO
50 Cent
10 Cent, 10 Cent
20 Cent
5 Cent





2

Hoeveel?



...1 euro en
...20 cent



...1 euro en
...70 cent




...1 euro en
...65 cent



...1 euro en
...90 cent



...1 euro en
...15 cent



...1 euro en
...35 cent



...1 euro en
...55 cent



...1 euro en
...45 cent

3

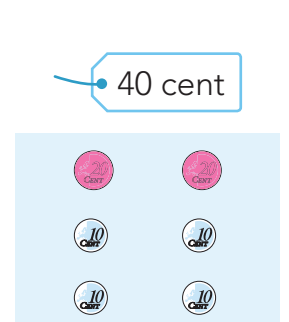
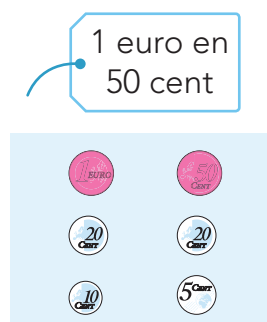
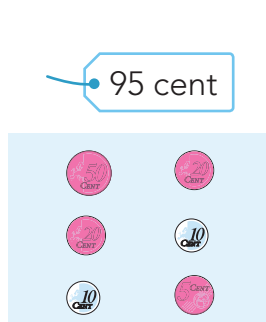
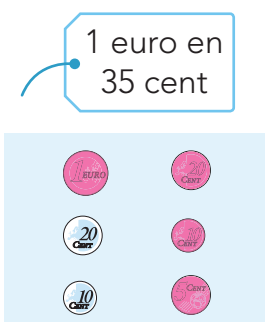
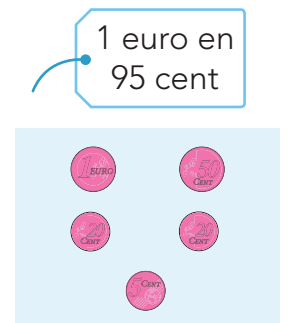
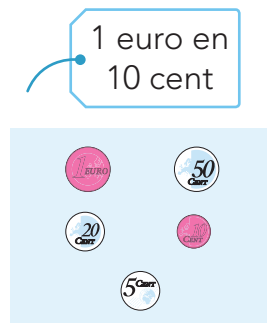

Welke munten komen erbij?

Betaal gepast.



4

Maak het bedrag met zo min mogelijk munten.



Klaar!