



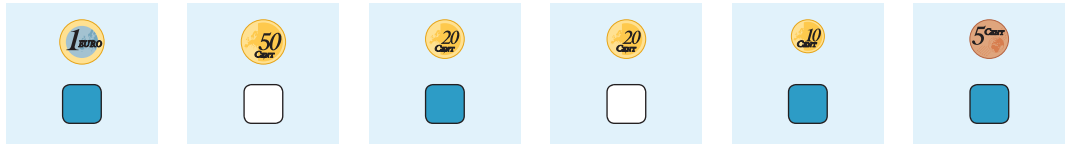
doel

► Je oefent bedragen tot en met 2 euro te herkennen en samen te stellen.

hulp



1 euro en 35 cent

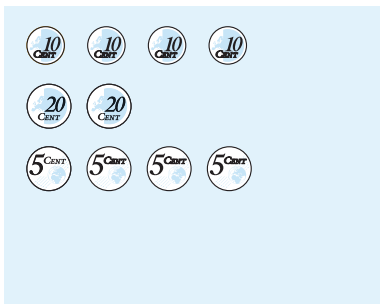


1

Maak het bedrag met zo min mogelijk munten.



45 cent



75 cent




90 cent



1 euro en 30 cent



1 euro en 60 cent



1 euro en 25 cent






2

Hoeveel?



..... euro en
..... cent



..... euro en
..... cent




..... euro en
..... cent



..... euro en
..... cent



..... euro en
..... cent



..... euro en
..... cent



..... euro en
..... cent

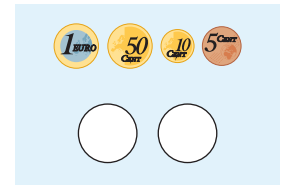
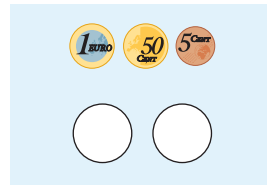
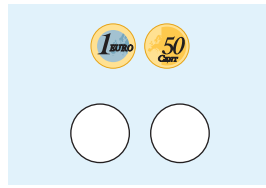


..... euro en
..... cent

3

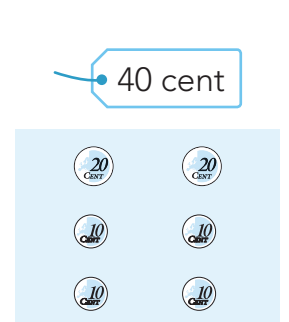
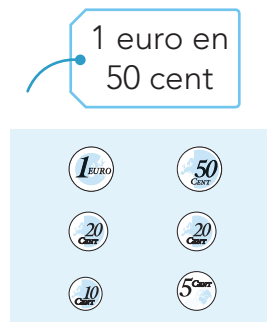
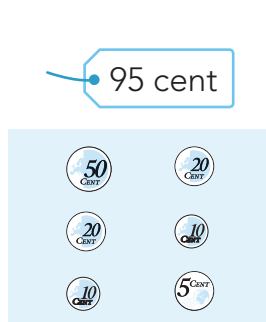
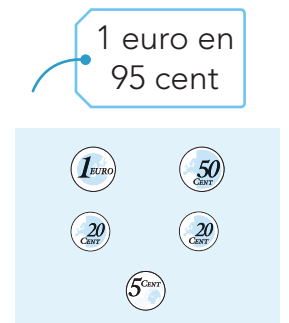
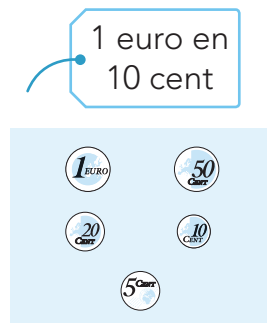
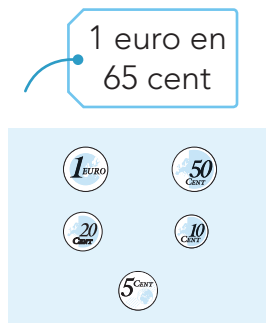
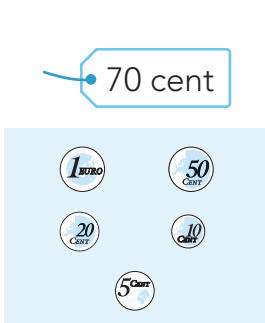
Welke munten komen erbij?

Betaal gepast.



4

Maak het bedrag met zo min mogelijk munten.



Klaar!