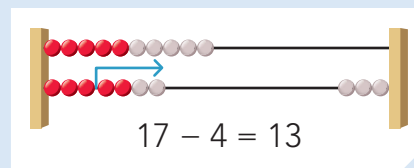
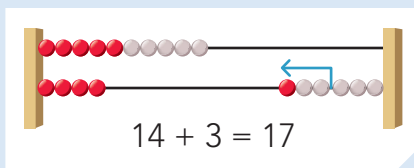
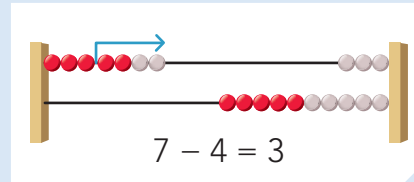
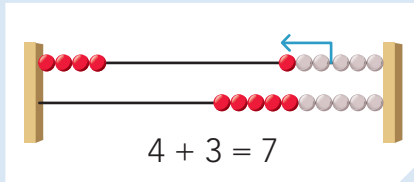




**doel**

- Je oefent plussommen en minsommen tot en met 20.
- Je denkt daarbij aan de sommen tot en met 10.
- Je weet het antwoord zonder te tellen.

**hulp**



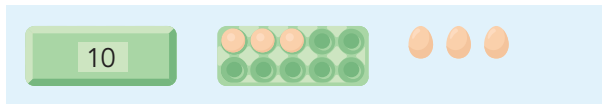
14 + 3 reken je uit met de kleine som: 4 + 3

17 - 4 reken je uit met de kleine som: 7 - 4

**1**

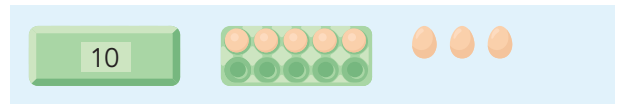
**Wat is de grote som? Wat is de kleine som?**

Reken uit.




$3 + 3 = 6$

$13 + 3 = 16$



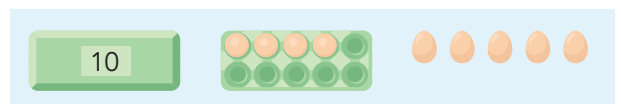
$5 + 3 = 8$

$15 + 3 = 18$



$1 + 2 = 3$

$11 + 2 = 13$



$4 + 5 = 9$

$14 + 5 = 19$

**ga verder** ➔



**2**

**Reken uit.**

Denk aan de kleine som.

$12 + 6 = 18$

$11 + 4 = 15$

$19 - 3 = 16$

$17 - 2 = 15$

$14 + 5 = 19$

$13 + 7 = 20$

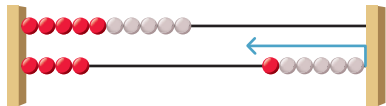
$18 - 5 = 13$

$20 - 10 = 10$

**3**

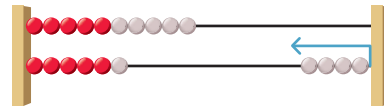
**Vul aan tot en met 20.**

Schrijf de hulpsom in de denkwolk.



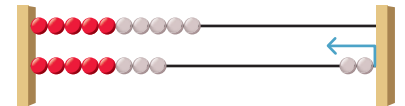
$4 + \dots 6 = 10$

$14 + \dots 6 = 20$



$6 + \dots 4 = 10$

$16 + \dots 4 = 20$



$8 + \dots 2 = 10$

$18 + \dots 2 = 20$

**4**

**Vul aan tot en met 20.**

Denk aan de vriendjes van 10.

$11 + \dots 9 = 20$

$13 + \dots 7 = 20$

$10 + \dots 10 = 20$

$19 + \dots 1 = 20$

$15 + \dots 5 = 20$

$16 + \dots 4 = 20$

$18 + \dots 2 = 20$

$14 + \dots 6 = 20$

**5**

**Maak de sommen.**

Schrijf de hulpsom in de denkwolk.

$2 + \dots 4 = 6$

$12 + 4 = 16$

$7 - \dots 5 = 2$

$17 - 5 = 12$

$8 + \dots 2 = 10$

$18 + \dots 2 = 20$

$3 + \dots 5 = 8$

$13 + 5 = 18$

$9 - \dots 4 = 5$

$19 - 4 = 15$

$5 + \dots 5 = 10$

$15 + \dots 5 = 20$

$1 + \dots 7 = 8$

$11 + 7 = 18$

$6 - \dots 4 = 2$

$16 - 4 = 12$

$1 + \dots 9 = 10$

$11 + \dots 9 = 20$

**Klaar!**