



doel

- ▶ Je oefent plussommen en minsommen tot en met 20.
- ▶ Je denkt daarbij aan de sommen tot en met 10.
- ▶ Je weet het antwoord zonder te tellen.

hulp

4 + 3 = 7

7 - 4 = 3

14 + 3 = 17

17 - 4 = 13

14 + 3 reken je uit met de kleine som: 4 + 3

17 - 4 reken je uit met de kleine som: 7 - 4

1

Wat is de grote som? Wat is de kleine som?

Reken uit.

..... + =

..... + =

..... + =

..... + =

..... + =

..... + =

..... + =

..... + =

ga verder ➔



2

Reken uit.

Denk aan de kleine som.

$12 + 6 = \dots\dots$

$11 + 4 = \dots\dots$

$19 - 3 = \dots\dots$

$17 - 2 = \dots\dots$

$14 + 5 = \dots\dots$

$13 + 7 = \dots\dots$

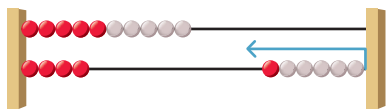
$18 - 5 = \dots\dots$

$20 - 10 = \dots\dots$

3

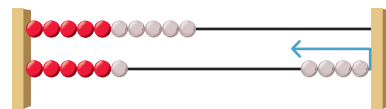
Vul aan tot en met 20.

Schrijf de hulpsom in de denkwolk.



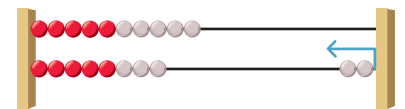
$4 + \dots\dots = 10$

$14 + \dots\dots = 20$



$6 + \dots\dots = 10$

$16 + \dots\dots = 20$



$8 + \dots\dots = 10$

$18 + \dots\dots = 20$

4

Vul aan tot en met 20.

Denk aan de vriendjes van 10.

$11 + \dots\dots = 20$

$13 + \dots\dots = 20$

$10 + \dots\dots = 20$

$19 + \dots\dots = 20$

$15 + \dots\dots = 20$

$16 + \dots\dots = 20$

$18 + \dots\dots = 20$

$14 + \dots\dots = 20$

5

Maak de sommen.

Schrijf de hulpsom in de denkwolk.

$12 + 4 = \dots\dots$
 $\dots\dots + \dots\dots = \dots\dots$

$17 - 5 = \dots\dots$
 $\dots\dots - \dots\dots = \dots\dots$

$18 + \dots\dots = 20$
 $8 + \dots\dots = 10$

$13 + 5 = \dots\dots$
 $\dots\dots + \dots\dots = \dots\dots$

$19 - 4 = \dots\dots$
 $\dots\dots - \dots\dots = \dots\dots$

$15 + \dots\dots = 20$
 $5 + \dots\dots = 10$

$11 + 7 = \dots\dots$
 $\dots\dots + \dots\dots = \dots\dots$

$16 - 4 = \dots\dots$
 $\dots\dots - \dots\dots = \dots\dots$

$11 + \dots\dots = 20$
 $1 + \dots\dots = 10$

Klaar!