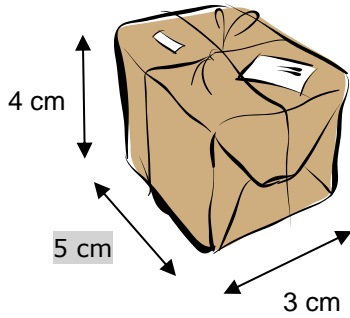
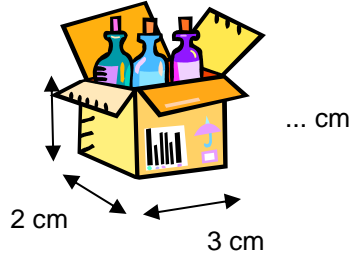


Naam:

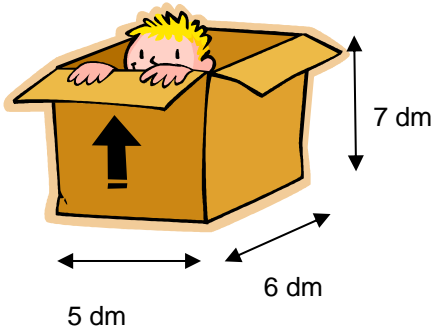
5



a) Wat is de inhoud van deze doos?

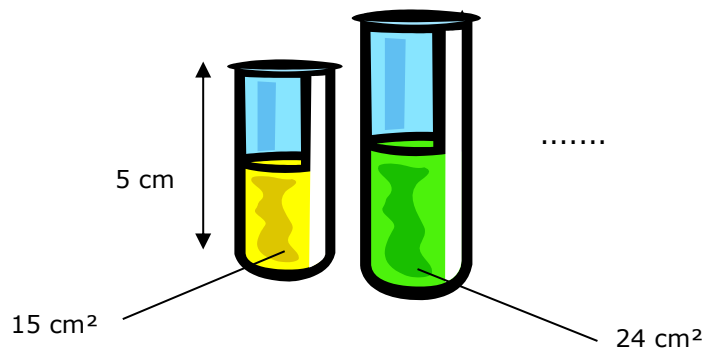


b) De inhoud van deze doos is 18 cm^3
 Wat is de hoogte?



c) Wat is de inhoud van deze doos?

d) Wat is de inhoud van de vaas links?



e) De inhoud van de vaas aan de rechterkant is 192 cm^3 . Wat is de hoogte?
